



















je joue avec la galette des rois

Coche les personnages, les animaux ou les objets dont le nom est féminin



Féminin

Coche le dessin identique à celui entouré

					
<input type="checkbox"/>	<input type="checkbox"/>	<input type="checkbox"/>	<input type="checkbox"/>	<input type="checkbox"/>	<input type="checkbox"/>
					
<input type="checkbox"/>	<input type="checkbox"/>	<input type="checkbox"/>	<input type="checkbox"/>	<input type="checkbox"/>	<input type="checkbox"/>

Trouve combien il reste de parts ?

	2	3	6	en fraction pour les plus grands (cm1-cm2-6e)		
<input type="checkbox"/>	<input type="checkbox"/>	<input type="checkbox"/>	<input type="checkbox"/>	$\frac{3}{3}$	$\frac{3}{4}$	$\frac{3}{1}$
	3	5	8	<input type="checkbox"/>	<input type="checkbox"/>	<input type="checkbox"/>
<input type="checkbox"/>	<input type="checkbox"/>	<input type="checkbox"/>	<input type="checkbox"/>	$\frac{3}{8}$	$\frac{8}{5}$	$\frac{5}{8}$
				<input type="checkbox"/>	<input type="checkbox"/>	<input type="checkbox"/>